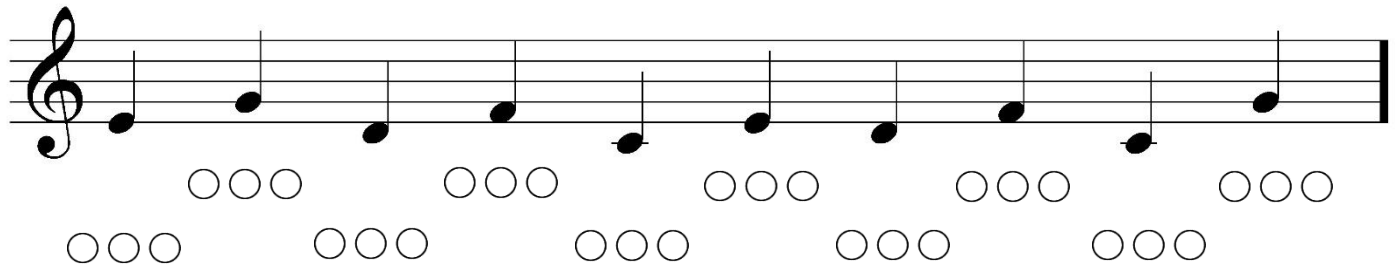
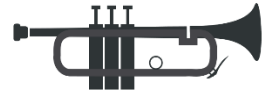
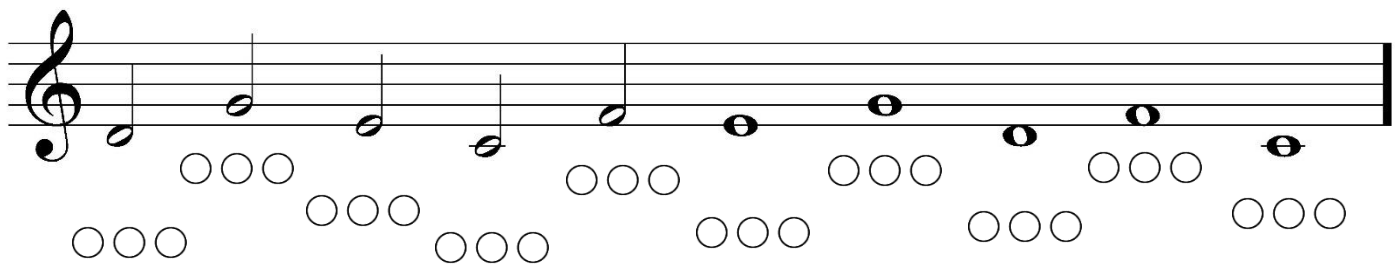


Trumpet Note and Fingering Quiz

1. Write the note names above the notes. 2. Mark the fingerings.



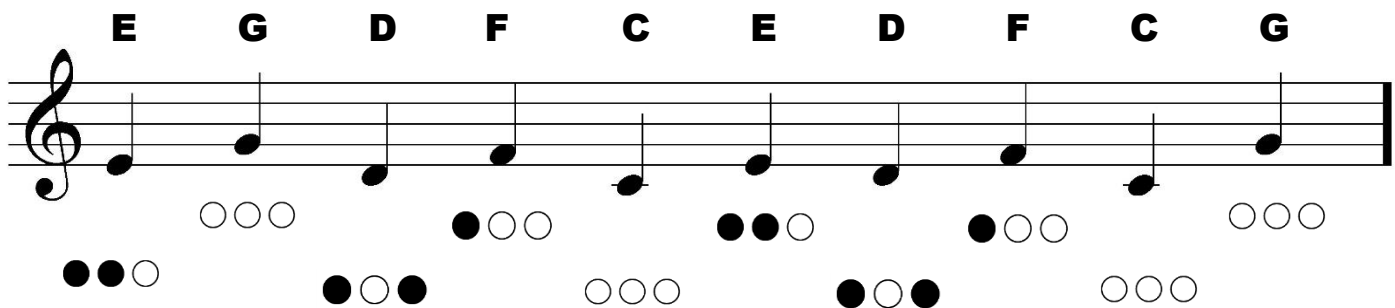
A musical staff in treble clef containing ten quarter notes. Below the staff are two rows of empty circles for marking fingerings. The notes are: G4, A4, B4, C5, B4, A4, G4, F4, E4, D4.



A musical staff in treble clef containing ten half notes. Below the staff are two rows of empty circles for marking fingerings. The notes are: G4, A4, B4, C5, B4, A4, G4, F4, E4, D4.


Fold the paper in half so you don't see the answers until you are finished.

E G D F C E D F C G



A musical staff in treble clef containing ten quarter notes. Above the staff are the note names: E, G, D, F, C, E, D, F, C, G. Below the staff are two rows of circles for marking fingerings. The notes are: G4, A4, B4, C5, B4, A4, G4, F4, E4, D4.

D G E C F E G D F C



A musical staff in treble clef containing ten half notes. Above the staff are the note names: D, G, E, C, F, E, G, D, F, C. Below the staff are two rows of circles for marking fingerings. The notes are: G4, A4, B4, C5, B4, A4, G4, F4, E4, D4.